

Ch. 6 Division Quiz

Name
Score

8

8-A+
7-B+
6-C

5-D
4-F
↓

1/24 Ch. 6 Division Quiz

Questions:

2pts.

72%

① Four pies are cut into 1/5 slices. How many total slices are there? Write a division sentence?

② $\frac{1}{3} \div \frac{1}{6} = ?$ 1pt. 100%

③ Which division sentence matches "4 people share 3 candy bars, how much does each person get?" 1pt. 44%

④ $6 \div 4 = ?$ 1pt. 57%

⑤ Half of a sandwich is shared by 2 people. How much of the sandwich does each person get? 2pts. 48%

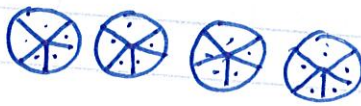
② $\frac{1}{3}$


③ A
 B
 C


④ 6

⑤ .5


Ch. 6
Division
Quiz

① $4 \div \frac{1}{5} = \boxed{20}$ $4 \cdot 5 = 20$ 

② $\frac{1}{3} \div \frac{1}{6} = \boxed{\frac{6}{3} = 2}$ 

③  Each person gets $\frac{3}{4}$.
 $3 \div 4 = \frac{3}{4}$

④ $6 \div 4 = \boxed{\frac{6}{4} = \frac{3}{2} = 1\frac{1}{2} = 1.5}$

⑤  Each person would get $\frac{1}{4}$ of a sandwich.
 $\frac{1}{2} \div 2 = \frac{1}{2} \times \frac{1}{2} = \boxed{\frac{1}{4}}$